

1. Work out $84 + 39$
(1 mark)2. Work out $132 - 56$
(1 mark)3. Work out 9×14
(1 mark)4. Work out $75 \div 3$
(1 mark)

5. Round 1538 to the nearest 100

.....
(1 mark)6. Work out $8 - 13$
(1 mark)7. What is $\frac{1}{4}$ of 24.....
(1 mark)

8. Find 20% of 50

.....
(1 mark)9. Convert $\frac{1}{5}$ to a decimal.....
(1 mark)10. Calculate 3^2
(1 mark)

11. Write down the next two numbers

3, 7, 11, 15,,,

(1 mark)

12. Simplify

 $\frac{5}{15}$
(1 mark)

Name : Class..... Score.....

13. Simplify $m + m - m$

.....
(1 mark)

14. Simplify $3 \times 5t$

.....
(1 mark)

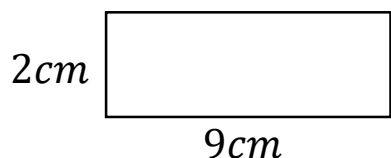
15. Expand $3(a - 10)$

.....
(2 marks)

16. Write down all the factors of 14

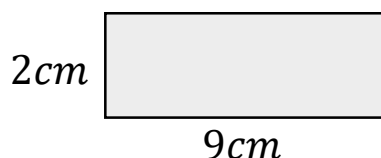
.....
(1 mark)

17. Calculate the perimeter



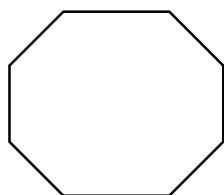
.....
(1 mark)

18. Calculate the area



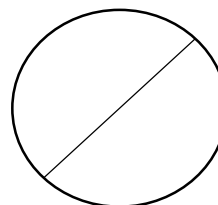
.....
(1 mark)

19. Name this shape




.....
(1 mark)

20. Name this part of a circle



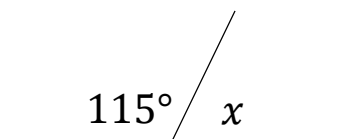
.....
(1 mark)

21. Draw all the lines of symmetry



.....
(1 mark)

22. Calculate x



$x = \dots\dots\dots$

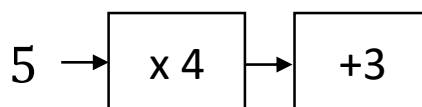
(1 mark)

23. Workout

4×3^2

.....
(1 mark)

24. Solve



.....
(1 mark)